

AMRITA VIDYALAYAM

ANNUAL EXAMINATION 2018 -'19

Name:

Class : II

Marks : 50

Time : 2 hrs

MATHEMATICS

KNOWLEDGE

I. Choose the correct answer from the brackets. 10

1. Multiplication is repeated _____. (addition, subtraction)
2. 10 tens make _____. (1, 10, 100)
3. 1 rupee = _____ paise. (1000, 100)
4. In a _____ pictures of items are used as symbols to replace their number. (photograph, pictograph)
5. $9 \times 2 =$ _____. (2, 18, 10)
6. 8 multiplied by a number is 0. Then the number is _____. (0, 8)
7. Republic Day is in the month of _____. (August, January)
8. The symbol of rupee is _____. ($\text{\$}$, \`)
9. Long distances are measured in _____. (cm, km)
10. We need _____ to buy things. (money, time)

UNDERSTANDING

II. Write true or false. 5

1. $600 \text{ p} = \text{\`} 600$. _____
2. 1 hour = 90 minutes. _____
3. 100 paise make 1 rupee. _____
4. 1 kg = 1000 g. _____
5. A spoon of water is best measured in litre. _____

III. $50 \text{ P} + 50 \text{ P} = \text{\`}$ _____ 2

IV. Write the multiplication fact. 1

$$5 + 5 + 5 + 5 + 5 = \underline{\hspace{2cm}}$$

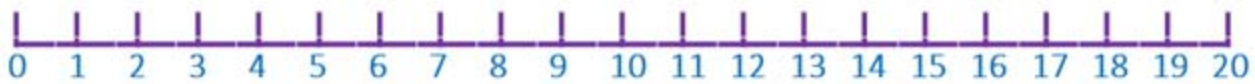
V. Write the time.

2



VI. Multiply 4×3 using number line.

2



VII.1. One day has _____ hours.

3

2. The second day of the week is _____.

3. One less than the smallest 3-digit number is _____.

APPLICATION

VIII.1. A packet contains 15 toffees. How many toffees will be there in 6 packets?

2½

a) Number of toffees in one packet = _____.

b) Number of packets = _____.

c) Total number of toffees = _____.

2. Raju went to shop and bought chocolates for ₹ 65 and 50 P and dress for ₹ 575.99 P. How much is the total cost?

2½

a) Cost of dress = _____.

b) Cost of chocolates = _____.

c) Total cost of both items = _____.

SKILL

IX. Convert the following.

2

1. 700 P = ₹ _____.

2. 755 P = ₹ _____ and _____ P.

X. Add.

2

$$\begin{array}{r} \\ 36 \\ + 21 \\ \hline \hline \end{array}$$

XI. Subtract.

2

$$\begin{array}{r} \\ 77 \\ - 24 \\ \hline \hline \end{array}$$

XII. Multiply.

3

1. 29×2

$$\begin{array}{r} 29 \\ \times 2 \\ \hline \hline \end{array}$$

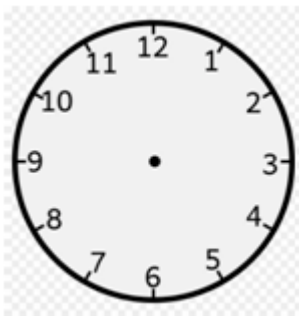
2. 45×3

$$\begin{array}{r} 45 \\ \times 3 \\ \hline \hline \end{array}$$

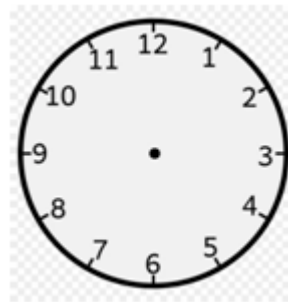
XIII. Draw hands to show the time.

3

1. Quarter past 1



2. Half past 2

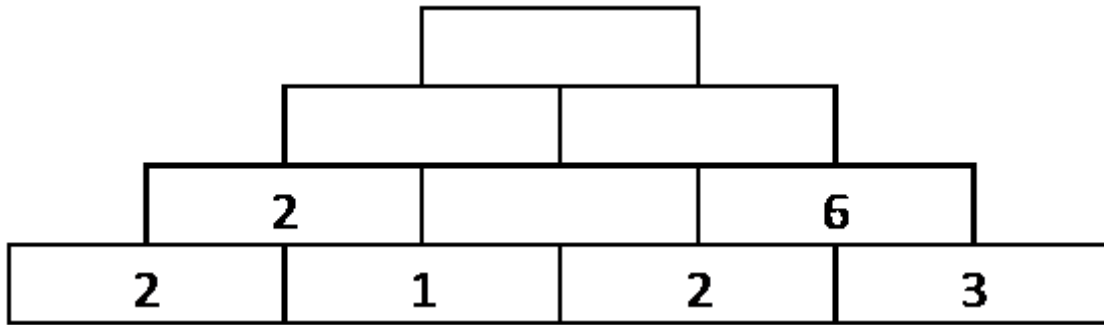


XIV. Name the months having 30 days.

1

XV. Climb the number mountain by multiplying the numbers in adjacent boxes.

3



XVI. The given list shows the number of items brought by the children of Std II for the fair to help the needy people.

4

Class	2 A	2 B	2 C	2 D
Items	Pencils	Eraser	Sharpner	Crayons
Number of Children	32	30	35	31

1. Which class brought eraser? _____
2. How many children are there in class 2 D? _____
3. Which class brought pencil? _____
4. Which class has more number of children? _____